



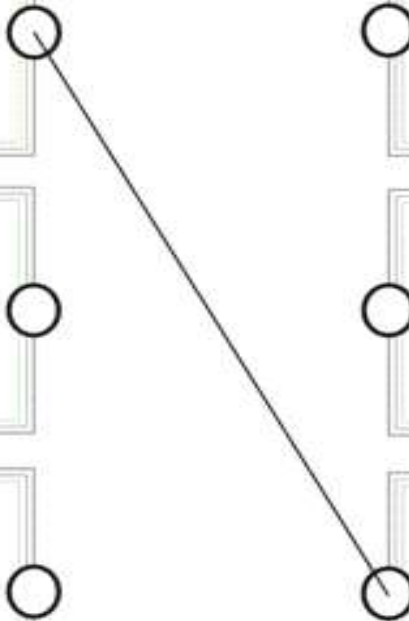
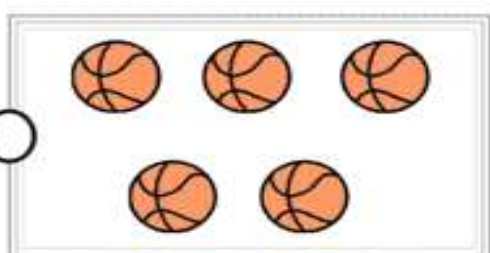
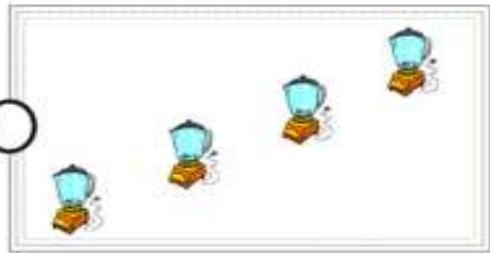
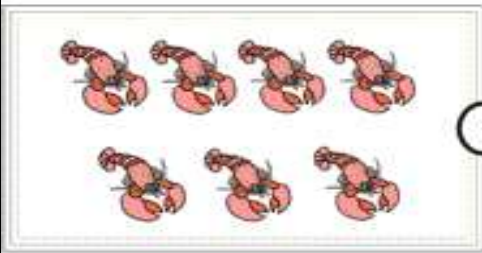
MATHEMATICS Ch-2 Counting in groups

Name : _____

Date _____

Class: II Sec: ____

Connect two boxes which have the same number.





Groups of Ten



Each plate has ten marbles. Count and write the total number in the box provided.

	<input type="text"/>
--	----------------------

	<input type="text"/>
--	----------------------

	<input type="text"/>
--	----------------------

	<input type="text"/>
--	----------------------

